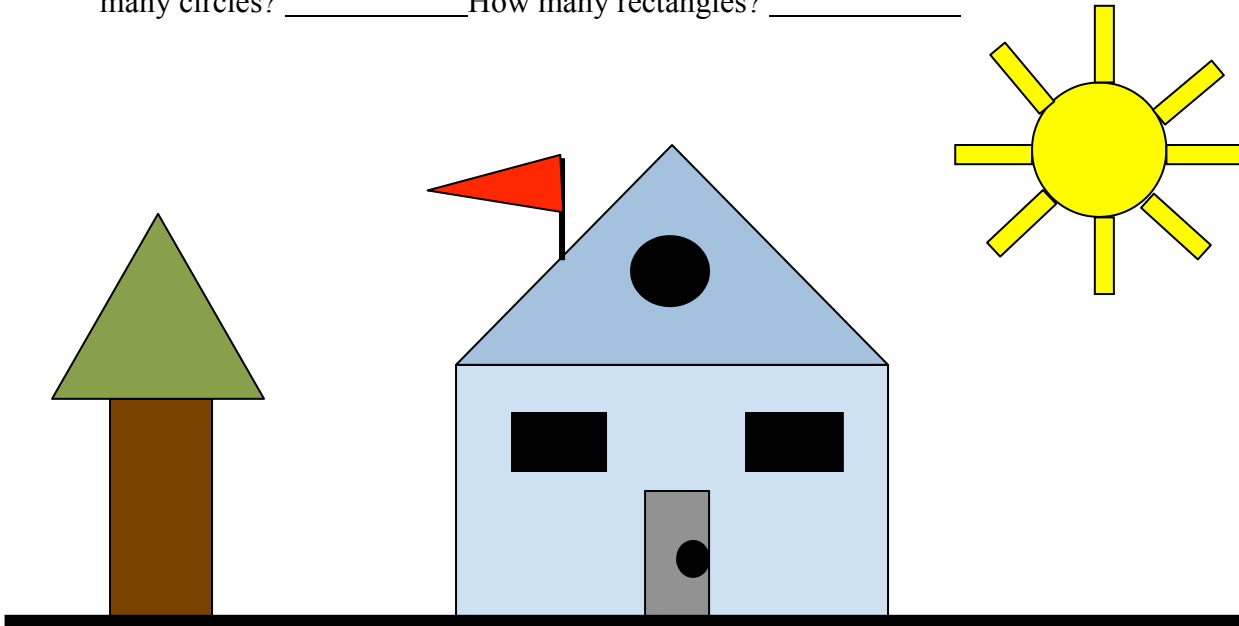


**Smiley Face Math
Kindergarten, Worksheet VII**

Name: _____

☺☺☺☺ 1. Tommy drew this picture. How many triangles did he use? _____ How many circles? _____ How many rectangles? _____




☺☺ 2. Circle the pictures that show a sphere. Tell how you know they are spheres.

Answer: They are spheres because _____

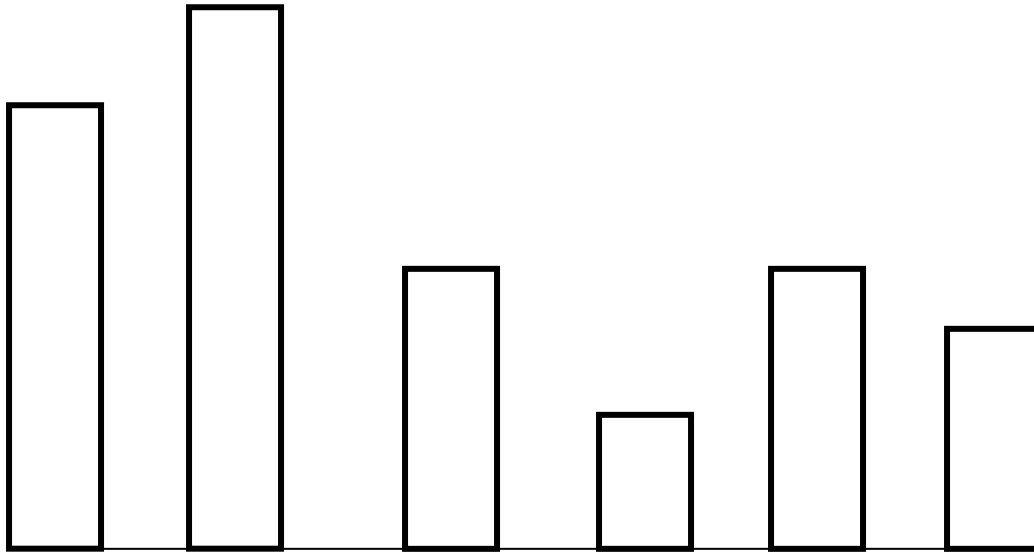


☺☺☺ 3. Start on the left and say the shape names in order. Then draw the next 6 shapes in this growing pattern.





4. Color the *tallest* rectangle blue. Color the *shortest* rectangle orange. Color the two rectangles that are *the same size* green.



5. Use the pictures below to answer the questions.

What shape is the outside edge of each picture in the top row? _____

What shape is the outside edge of each picture in the middle row? _____

What shape is the outside edge of each picture in the bottom row? _____

