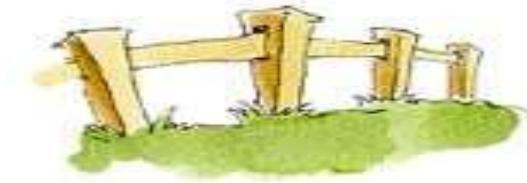


Smiley Face Math
Grade 2, Worksheet V

Name: _____



1. Marcus wants to build a rectangular fence for his dog Marley. Two sides will be 20 feet long and two sides will be 15 feet long. How many feet of fence does he need to buy?



Answer: He needs to buy ___ feet of fence.



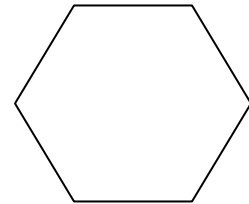
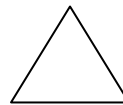
2. Marcus wants to put a pole every 5 feet to hold up the fence. How many poles does he need to buy?

Answer: He needs to buy ___ poles.



3. How many triangles like the one below fit into the hexagon? ____ What fraction of the hexagon is the triangle?

Answer: ____



4. Think about the second row of numbers in the chart. What are the 7th and 8th numbers in the second row?

Answer: ____ and ____

1 st	2 nd	3 rd	4 th	5 th	6 th	7 th	8 th	9 th	10 th
12	15	18	21	24	27	?	?	36	39

Tell in words how you know:



5. Al has 642 baseball cards. His brother Toby has 128 less than Al.
How many baseball cards does Toby have?



_____ baseball cards



6. Chelsea had two \$1 bills and a quarter to spend at the candy store.
Her sister Ashley had 8 quarters, 3 dimes, and a nickel.
Which sister had more money to spend? _____ How much more? _____

Chelsea-



Ashley-



7. There are 13 crayons in the package below. Is 13 an *even* or an *odd* number?
Explain how you know.

Answer:



8. Make a paper airplane. Throw it and measure how far it goes in inches. Answer: ____ inches
Throw it a second time and measure how far it goes this time. Answer: ____ inches



Which throw went the longest distance? _____

How much longer was it? _____ inches longer