


**Smiley Face Math**  
**Grade 1, Worksheet V**

Name: \_\_\_\_\_

- 😊😊 1. Jason has 7 toy cars. James has the same number. How many do they have in all?

Answer: Together they have \_\_\_\_\_ toy cars.

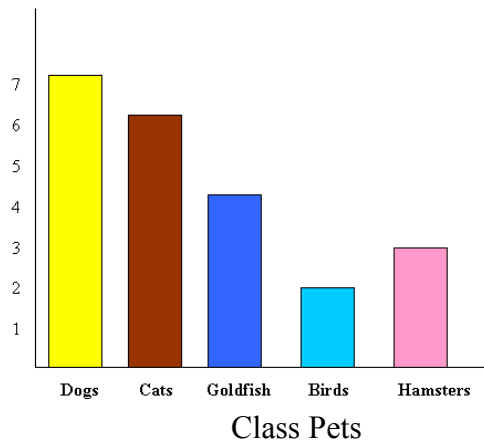


- 😊😊 2. Tiffany saw 9 fish. Of those 9 fish, 2 swam away. How many fish does Tiffany see now?


Answer: She sees \_\_\_\_\_ fish now.



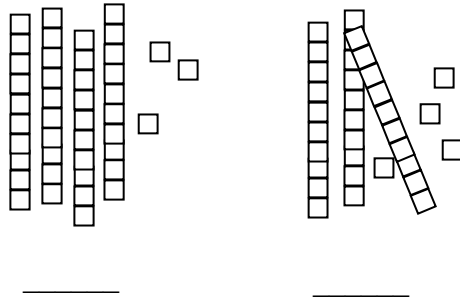
- 😊😊😊😊 3. a. How many students had goldfish for pets? \_\_\_\_\_ c. How many had cats for pets? \_\_\_\_\_  
 b. How many students had birds for pets? \_\_\_\_\_ d. How many more had dogs for pets, than had hamsters for pets? \_\_\_\_\_



- 😊😊 4. How many circles make up the polar bear face? \_\_\_\_\_



☺☺ 5. Write the two numbers shown by the tens and ones below:



☺☺ 6. Which number is bigger, 34 or 43? \_\_\_\_\_

Explain why you think \_\_\_\_\_ is bigger than \_\_\_\_\_:

☺☺ 7. Use the pictures in problem 5 to help you:  $43 + 34 =$  \_\_\_\_\_

☺☺ 8. Use the pictures in problem 5 to help you:  $43 - 34 =$  \_\_\_\_\_

☺☺☺ 9. a. Add 7 to how old you are. What is your answer? \_\_\_\_\_

b. Subtract 7 from your answer above. What is your new answer? \_\_\_\_\_

c. What happens when you add 7 to a number, then subtract 7? What number do you get?

\_\_\_\_\_

