



- ☺ ☺ ☺ 1. Use toothpicks to make some closed shapes that have 3 sides and some shapes that have 4 sides. Draw your shapes in the box below.

Make a Shape



- ☺ ☺ 2. Look at the rows of fruit. How many more apples are there than oranges? _____

Tell how you know.



- ☺ ☺ 3. There were nine balloons at a birthday party. Three of them popped. How many balloons were left?


Answer: _____



☺ ☺ 4. Jack put on his pajamas. Was it morning or nighttime? _____

Circle what he might have seen in the sky. Tell how you know.

Answer: I know because _____.



☺ ☺ ☺ 5. Look at the picture below.

Color the shapes that are **over** the dog.

Put dots inside the shapes that are **under** the dog.

Draw a triangle **next to** the dog's bone.

