

Smiley Face Math
Grade 2, Worksheet I

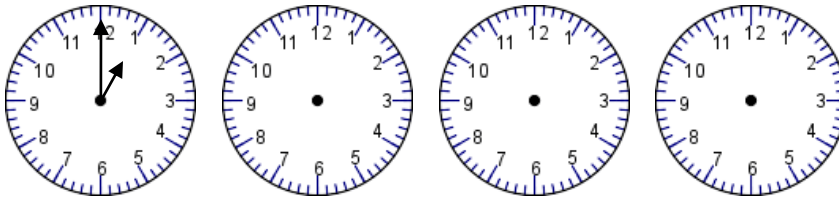
Name _____

- ☺ 1. Complete the two patterns.

448, 458, 468, _____, _____, 498, _____, 518

285, 385, 485, 585, _____, _____, _____, _____, 1085

- ☺ ☺ 2. Jackson ate a cookie at 1:00. He ate another cookie every $2\frac{1}{2}$ hours. Draw the hands to show when Jackson ate his four cookies. The 1:00 cookie is done for you.



- ☺ ☺ ☺ 3. Mario looked at his sister's tricycle and counted 3 wheels.

If his sister had 5 friends over to play, and each brought her tricycle, how many wheels would there be?

Answer: _____



- ☺ ☺ ☺ 4. Destiny saved 3 quarters, 3 nickels, and 10 pennies each week from her allowance.

How much money will she save in 1 week? _____

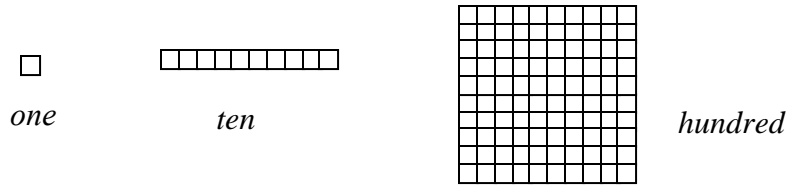
How much money will she have saved after six weeks? _____

Explain your thinking.

- ☺ ☺ ☺ 5. In each square, draw lines to show *fourths*. Draw three different ways to show *fourths*.



☺ ☺ ☺ ☺ 6. Shown below is a small square, then 10 small squares, then 100 small squares.



- a. How many *tens* are needed to make 100 small squares? _____
- b. How many *hundreds* are needed to make 1,000 small squares? _____
- c. How many *tens* are needed to make 1,000 small squares? _____
- d. How many *tens* are needed to make 2,000 small squares? _____

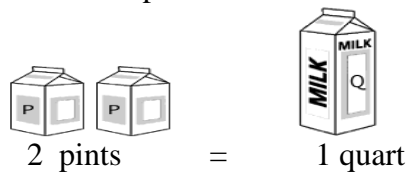
☺ ☺ 7. Estimate to the *nearest hundred*.

*Jenny has 482 marbles, 216 stickers, and 91 shells.
About how many items does Jenny have?*


About _____ items

Explain how you estimated:

☺ ☺ 8. Use the picture to help you solve the problem.



Circle the set which holds less milk.



Explain how you know: