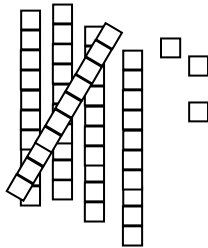


Smiley Face Math
Grade 1, Worksheet X


Name: _____

☺☺☺ 1. Give the number of *tens* and *ones* for each group below:

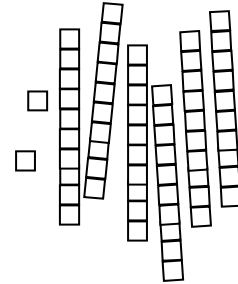
___ *tens* and ___ *ones*



___ *tens* and ___ *ones*



___ *tens* and ___ *ones*



☺☺ 2. How many paperclips long is the pencil? _____ paper clips

How can you tell?



☺☺ 3. Karl scored 4 goals in a soccer game. He scored 1 goal in the next game and 2 goals the game after that. How many goals did he score in the three games? _____




☺☺☺ 4. When you count, what number comes after 66? _____

When you count, what number comes before 32? _____

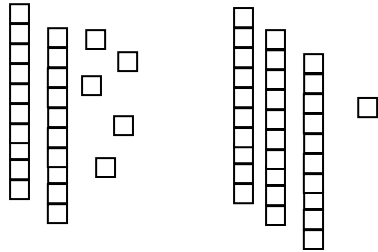
When you count, what number comes between 23 and 25? _____



5. Judy saw seven dolphins swimming. Then she saw four more. How many dolphins did Judy see in all? _____ dolphins



6. Put the *tens* and *ones* together to show $25 + 31$.



$$25 + 31 = \underline{\quad} \text{ tens and } \underline{\quad} \text{ ones}$$



7. There were 8 fire trucks at the truck show. Five left to go to a fire. How many trucks were left at the truck show? _____



8. Jill wanted to make 10 sand castles. She has made 2 already. How many more does Jill need to make?



Answer: Jill needs to make more sand castles.